

Total Marks 200

509

# ECONOMICS

(English Medium)

Category

A

509-ECONOMICS

A 50900316

SEAL SEAL SEAL SEAL SEAL SEA

Seat No. of the Candidate

--	--	--	--	--	--	--	--	--	--

Block No. of the Candidate

--

Signature of the Candidate

--

Signature of the Block Supervisor

--

### Important Instructions for Candidates

- (1) Please do not open the question booklet until you are told to do so.
- (2) During examination, if a candidate is found having any literature guide, guide, piece of paper, handwritten or printed paper, mobile phone, calculator, spy camera, headphone or any other equipments then the candidate will be considered as disqualified.
- (3) During the examination if candidates are found conversing with each other, making noise or not following supervisor's instructions then they will be considered as disqualified.
- (4) After receiving question paper please write your seat number in **OMR SHEET** at the correct given place.
- (5) Please do not write your seat number at any other place than the allotted one in the **OMR SHEET** and if any sign of your identity or recognition is found then you will be considered totally disqualified for the examination.
- (6) Signatures of both the supervisor and the candidate in the certificate of **OMR SHEET** are compulsory without which **OMR SHEET** will not be evaluated, so it is compulsory for the candidate to get signature of the supervisor.
- (7) Candidates can use blue/black ball pen. They cannot use pens or pencils of any other colour and also whitener.
- (8) No marks should be made on any of the options in the question paper.
- (9) There are total 200 questions in this question paper. There is only one answer to each question from the options A, B, C and D. Four options are given for each question. All the questions are compulsory.  
Example: What is the capital of Gujarat?  
(A) Ahmedabad (B) Gandhinagar (C) Vadnagar (D) Patan  
Here, if option (B) Gandhinagar is correct then option (B) in the **OMR SHEET** will have to be darkened with pen. A ● C D
- (10) One(1) mark is allotted to each correct answer. For each wrong answer 0.25 marks will be deducted. If a candidate does not want to answer any question then he/she will have to select option E. Negative marking will not be applicable for option E.
- (11) Cross marked answers, answers given on more than one option and answers re-marked after use of blade, eraser or whitener will be given **Negative 0.25 marks**.
- (12) Please hand over the **OMR SHEET** to the block supervisor after completion of examination before leaving the classroom. Any candidate failing to do so will be considered as disqualified for the examination.
- (13) Maximum time allotted for the examination is 180 minutes.
- (14) Most appropriate option will be considered as answer of the question.

- (1) How many Indian languages have been declared endangered by UNESCO  
(A) 195 (B) 196 (C) 189 (D) 197
- (2) The National Education Policy (NEP) 2020, integrates \_\_\_\_\_ to root education in ancient knowledge of India and its contribution in modern India.  
(A) Knowledgeable India (B) Indian Knowledge System  
(C) Modern India (D) Ancient India
- (3) The full form of PARAKH is \_\_\_\_\_.  
(A) Private Assessment, Report and Analysis of Knowledge for Holistic  
(B) Performance Assessment, Review and Analysis of Knowledge for Holistic development  
(C) Performance Assistant, Review and Analysis of knowledge for Holistic development  
(D) Personal Assistant, Review and Analysis of Knowledge for Holistic development.
- (4) A scientist of Indian origin who made groundbreaking contribution in the study of DNA was \_\_\_\_\_.  
(A) Radha Krushnan (B) Amartya Sen  
(C) Hargovind Khurana (D) Dr. A.P.J. Abdul Kalam
- (5) The Three Tier Panchayati Raj System was recommended by \_\_\_\_\_.  
(A) Mactapl Committee (B) British Committee  
(C) Sevak Committee (D) Balwantrai Mehta Committee
- (6) Commonwealth Games were previously known as \_\_\_\_\_.  
(A) European Games (B) Euro – Asian Games  
(C) Common Games (D) British Empire Games
- (7) Who appoints CAG?  
(A) Prime Minister (B) President  
(C) Vice-President (D) Chief – Minister
- (8) The battle between Porus and Sikander was fought on the bank of \_\_\_\_\_ river.  
(A) Chenab (B) Ravi  
(C) Satluj (D) Jhelum

- (9) "Who among the following reigned during the Anno Domini Period?"  
(A) Chandragupt Maurya (B) King Ashok  
(C) Khilji Dynasty and Tughlaq Dynasty (D) Bindusara
- (10) \_\_\_\_\_ is the most renowned form of dance of Maharashtra.  
(A) Ghumar (B) Kalbeliya  
(C) Kachhighodi (D) Laavani
- (11) \_\_\_\_\_ was invented by Michael Faraday?  
(A) Penicillin  
(B) Periodic Table  
(C) Precious Metal - Radium  
(D) Conversion of Kinetic Energy into Electric energy
- (12) \_\_\_\_\_ among the following was written by Manubhai Pancholi (Darshak)  
(A) Upanas (B) Socrates  
(C) Anunay (D) Hayaati
- (13) Anup Kumar is a renowned \_\_\_\_\_ player.  
(A) Kho - Kho (B) Kabaddi  
(C) Cricket (D) Football
- (14) \_\_\_\_\_ was Suggested by Swami Vivekanand to Promote nationalism in India.  
(A) Pride of the nation  
(B) Public awareness and upliftment of the poor  
(C) Inclusive Vision  
(D) Cultural Pride
- (15) \_\_\_\_\_ is not a renewable energy resource.  
(A) Forest (B) Wind  
(C) Natural Gas (D) Sunlight

\_\_\_\_\_ was considered as the "Soul of Indian constitution" by Dr. B. R. Ambedkar.

- (A) Right to Education
- (B) Cultural and Educational Right
- (C) Right to go against exploitation
- (D) Right to the Constitutional Remedies

Panchayati Raj Institutions came to exist on \_\_\_\_\_ in Gujarat.

- (A) 1st May, 1960
- (B) 20th April, 1993
- (C) 15th August, 1947
- (D) 1st April, 1963

\_\_\_\_\_ is not founded by the Government to implement the recommendations of Mudaliar Commission 1953.

- (A) Rural Higher Education Committee
- (B) University Grants Commission
- (C) All India Education Council
- (D) All India Council of Sports

Astronaut Sunita Williams has an ancestral link with \_\_\_\_\_.

- (A) Karnal, Haryana
- (B) Vadodara, Gujarat
- (C) Mahesana, Gujarat
- (D) Kurukshetra, Haryana

\_\_\_\_\_ hosted the Kabaddi World Cup 2025.

- (A) India
- (B) England
- (C) South Korea
- (D) Malaysia

Open and Distance Learning (ODL) is included in \_\_\_\_\_ education.

- (A) Formal
- (B) Informal
- (C) Non-formal
- (D) None of the above

"I never teach my pupils; I only attempt to provide the conditions in which they can learn" who quoted it?

- (A) Maharshi Arvind
- (B) Albert Einstein
- (C) Pestology
- (D) Eric Crome

- (23) "A person must use the development of his individuality by aligning it to the social needs."  
This is \_\_\_\_\_ aim of education.
- (A) an Individual (B) a Social  
(C) a Peculiar (D) a Sovereign
- (24) \_\_\_\_\_ described education as a tri-polar process consisting of the teacher the learner the environment or syllabus as a third pole".
- (A) John Dewey (B) John Adams  
(C) Herbert Spencer (D) Benjamin S. Bloom
- (25) Idealism is also known as \_\_\_\_\_.
- (A) Idealism (B) Realism  
(C) Naturalism (D) Pragmatism
- (26) John Dewey, Kilpatrick, and Mahatma Gandhi advocated \_\_\_\_\_.
- (A) Existentialism (B) Naturalism  
(C) Idealism (D) Pragmatism
- (27) Social and National Integration can be attained through \_\_\_\_\_.
- (A) Joint Family (B) Requirement of Food  
(C) Democracy (D) Population growth
- (28) What kind of education enables human to utilize free time more joyful and productive activities
- (A) Non-formal Education  
(B) Continuing Education  
(C) Life-long Education  
(D) Education through correspondence
- (29) The cultural objective of education emphasizes on \_\_\_\_\_.
- (A) to enrich a person with knowledge  
(B) to inculcate ideals and morals in life  
(C) to Transfer Knowledge, Art, Literature, Music from generation to generation.  
(D) to enable a person to earn livelihood

- (30) "Human bears the competency of adapting to the situation and adapting one's needs to the situation" \_\_\_\_ form of pragmatism supports it.
- (A) Nominalistic Pragmatism (B) Experimental Pragmatism  
(C) Biological Pragmatism (D) Humanistic Pragmatism
- (31) A person with IQ score 100, is placed in \_\_\_\_ category.
- (A) Average Intelligence (B) High Intelligence  
(C) Lower Intelligence (D) Superior Intelligence
- (32) \_\_\_\_ type of Psychological conflict do Students Face when they neither want to stay at home nor go to school?
- (A) Approach – Avoidance (B) Approach – Approach  
(C) Avoidance – Avoidance (D) Dual Approach Avoidance
- (33) A Psychologist who believed that "Motivation is cyclic"
- (A) Lipid (B) C.T. Morgan  
(C) Lewin (D) Emilicuma
- (34) Which test is used to detect mental retardation among children?
- (A) Achievement Test (B) Reading Test  
(C) Through General Observation (D) Intelligence Test
- (35) The full form of GATB is \_\_\_\_.
- (A) Great Attitude Test Box  
(B) Global Attitude Test Book  
(C) Global Aptitude Test Book  
(D) General Aptitude Test Battery
- (36) \_\_\_\_ is placed the first among eight stages of Robert Gagne's approach.
- (A) Stimulus – Response Approach  
(B) Verbal – Association Approach  
(C) Problem – Solving Approach  
(D) Chaining Approach

- (37) "Trial and Error Principle" of Thorndike is known as \_\_\_\_\_.
- (A) Stimulus – Response Approach
  - (B) Theory of operant conditioning
  - (C) Cognitive Learning Theory
  - (D) Principle of motivation
- (38) After fulfilling basic Physiological need, the next level in Maslow's Hierarchy of needs is \_\_\_\_\_.
- (A) Love and Belongingness
  - (B) Esteem Needs
  - (C) Self – Actualization needs
  - (D) Safety Needs
- (39) The measurement of intelligence was first successfully introduced by \_\_\_\_\_.
- (A) Garrett and Menttest
  - (B) Binet and Simon
  - (C) Crow and Crow
  - (D) Thurston and Speareman
- (40) The learning graph remains extended and horizontal during \_\_\_\_\_ temporary stage.
- (A) Learning
  - (B) Maturity
  - (C) Plateau
  - (D) End
- (41) To counsel a student towards the most suitable field of learning and future profession, educators usually rely on \_\_\_\_\_ test.
- (A) Intelligence Test
  - (B) Personality Measurement Test
  - (C) Aptitude Test
  - (D) Diagnostic Test
- (42) To enable a student to develop their creativity fully and completely, maximum importance should be given to \_\_\_\_\_.
- (A) Process
  - (B) Idea
  - (C) Excellence
  - (D) Creativity
- (43) While framing the teaching method in curriculum development, \_\_\_\_\_ state of students requires prior consideration.
- (A) Mental
  - (B) Physical
  - (C) Emotional
  - (D) Holistic

- (44) \_\_\_\_\_ is Pre-requisite in order to promote concentration in Students.
- (A) Proficiency of Teacher  
(B) Selection of proper method, congruent to the unit  
(C) Age level  
(D) Mental level
- (45) Any action that is derived from internal motivation and different from temptation is called \_\_\_\_\_.
- (A) Improper (B) Motivation  
(C) Eligibility (D) Distress
- (46) Classroom behaviour generally observes total \_\_\_\_\_ types of interactions.
- (A) Five (B) Two  
(C) Three (D) One
- (47) Bakum developed an evaluation process to measure \_\_\_\_\_ development of student.
- (A) Physical (B) Mental  
(C) Holistic (D) Social
- (48) \_\_\_\_\_ has released an education from the bandage of Time, Collection and number.
- (A) Internet (B) Technology  
(C) Website (D) Open University
- (49) The research that scientifically studies the daily problems of the school is called, \_\_\_\_\_ research.
- (A) Pragmatic (B) Action  
(C) Conditioning (D) Visiting
- (50) To find out the mid-point of the given group, \_\_\_\_\_ is calculated
- (A) Median (B) Mode  
(C) Mean (D) Any of the above
- (51) \_\_\_\_\_ is also known as Skinnerian Instruction.
- (A) Branchial Instruction (B) Linear Instruction  
(C) Mathematical Instruction (D) All of the above

- (52) Ned Flanders' Interaction analysis categories comprises Ten main categories, out of the
- (i) Teacher's Talk
  - (ii) Pupil's Talk
  - (iii) Silence
- Which of the following shows the correct order?
- (A) (i) 7 (ii) 1 (iii) 2
- (B) (i) 4 (ii) 4 (iii) 2
- (C) (i) 6 (ii) 3 (iii) 1
- (D) (i) 7 (ii) 2 (iii) 1
- (53) \_\_\_\_\_ is a correct formula for calculating Percentile Rate.
- (A)  $PR = 100 - \frac{(100R - 50)}{N}$
- (B)  $PR = 100 \frac{(100R - 50)}{N}$
- (C)  $PR = 100 - \frac{(50R - 100)}{N}$
- (D)  $PR = 1 - \frac{(100R - 50)}{N}$
- (54) \_\_\_\_\_ is a correct mean of 6, 9, 10, 12, 16, 17.
- (A) 10
- (B) 11
- (C) 17
- (D) 12
- (55) "Teacher uses the change in gestures, modulation of voice and hands' movement so that students are focused" – This is mainly applied in \_\_\_\_\_ skill.
- (A) Introductory
- (B) Illustration
- (C) Learning aids Experiment Skill
- (D) Stimulus change
- (56) \_\_\_\_\_ will replace the (?)
- 3000, 1500, 500, 125, (?)
- (A) 100
- (B) 50
- (C) 25
- (D) 20
- (57) 'A' is the sister of 'B'. 'C' is the mother of 'B'. 'D' is the father of 'C'. Then D is the \_\_\_\_\_ of A.
- (A) Maternal Uncle (Mama)
- (B) Father
- (C) Maternal Uncle (Maasa)
- (D) Maternal Grandfather

58) \_\_\_\_\_ among the following cannot be framed by using the letter of word

“INDEPENDENCE”

- (A) NICE
- (B) PINE
- (C) PENDING
- (D) INDEED

59) Kavya begins to walk to the south from point A. She turns left after walking 30 metres. Then she walks 40 metres straight and reaches the point 'B'. Now find the distance between 'A' and 'B'.

- (A) 50 metres
- (B) 35 metres
- (C) 70 metres
- (D) 120 metres

60) If B=2, BAG = 10 then find the value of BOX.

- (A) 11
- (B) 12
- (C) 41
- (D) 42

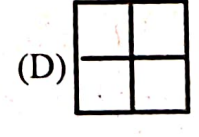
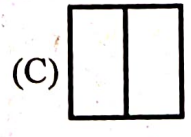
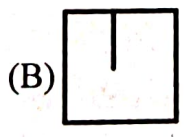
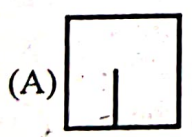

61) Find the correct odd one from the following.

- (A) DEGJ
- (B) MNPS
- (C) PQTX
- (D) TUWZ

62) Five friends are sitting in a line, A is sitting right to B, but not sitting the first. C is sitting left to D. If B is sitting right to E then who is exactly in the middle?

- (A) A
- (B) B
- (C) D
- (D) E

63) Figure is given. \_\_\_\_\_ among the option correctly replaces (?).

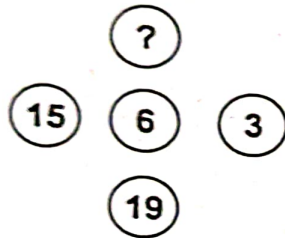


(64) 34, 18, 10, 6, 4, \_\_\_\_\_  
(A) 0 (B) 1 (C) 2 (D) 3

(65) If DOG is coded as '4157' Then LION will be \_\_\_\_\_  
(A) 1271514 (B) 1291514  
(C) 1291312 (D) 1181514

(66) There are total 65 students in a line. A stands 36th from the left, B stands 36th from the right. \_\_\_\_\_ students must be standing between both A and B.  
(A) 9 (B) 13  
(C) 15 (D) 11

(67) \_\_\_\_\_ will replace the (?)



(A) 91 (B) 610  
(C) 691 (D) 587

(68) Thermometer : Temperature :: Earthquake : \_\_\_\_\_

(A) Scale (B) Seismograph  
(C) Anemometer (D) Odometer

(69) The angle formed by the minute and hour hands at 4:00 pm is \_\_\_\_\_

(A) 120° (B) 100°  
(C) 80° (D) 60°

(70) \_\_\_\_\_ among the following will stay first if arranged in alphabetical order.

(A) Overbid (B) Outstanding  
(C) Oval (D) Outstep

- (71) કયા વાક્યમાં અવ્યયનો ઉપયોગ થતો નથી ?  
 (A) તે પાસ થયો કેમ કે તેણે ખૂબ મહેનત કરેલી. (B) શાબાશ છે એ બહાદૂર જુવાનને !  
 (C) એ પ્રાણઘાતક અકસ્માતથી તે મરી જાત. (D) એ ચોરની પેઠે ઘરમાં ઘૂસ્યો.

- (72) કયું વાક્ય કર્મણિ પ્રયોગમાં નથી ?  
 (A) તને વિમાન દેખાય છે ? (B) મેં શીપસિન કર્યું.  
 (C) મને વાત સમજાય છે. (D) મારે આસને બેસવું છે.

- (73) A સાથે Bનાં સાચાં જોડકાં દર્શાવતો વિકલ્પ કયો છે ?

A

B

(a) લખવાનું આપોને

(i) ભવિષ્યકૃદંત

(b) માગ્યા મેહ વરસે નહીં

(ii) સંબંધક ભૂ.કૃ.

(c) લખી લખીને ઘાક્યો

(iii) હેત્વર્થ

(d) વાંચવા આવજો

(iv) ભૂતકૃદંત

(A) (a) i, (d) ii, (b) iii, (c) iv

(B) (b) i, (c) ii, (d) iii, (a) iv

(C) (c) i, (b) ii, (d) iii, (a) iv

(D) (a) i, (c) ii, (d) iii, (b) iv

- (74) કયા જોડકામાંના શબ્દો એક પ્રકારનો જ સમાસ દર્શાવે છે ?

(A) તપોધન, પાકવેતર

(B) ઘનશ્યામ, કાપુરુષ

(C) કલ્પલતા, શ્રીયુત

(D) શેષશાપી, સ્વચ્છંદ

- (75) એ શબ્દ શોધો કે જેનો અર્થ અન્ય કરતાં ભિન્ન છે.

(A) પુંડરિક

(B) પર્યંક

(C) રાજીવ

(D) શતદલ

- (76) સાચી જોડણી પસંદ કરો.

(A) હિમસૂતા

(B) હીમસુતા

(C) હીમસૂતા

(D) હિમસુતા

- (77) એ, થી, થકી, વડે વગેરે પ્રત્યયો કઈ વિભક્તિમાં આવે છે ?

(A) સંપ્રદાન

(B) અપાદાન

(C) સંબંધ

(D) કરણ

- (78) પોતાની વાતને કે વિષયને સ્પષ્ટ કરવાનો પ્રયત્ન કરતા ગદ્યને કયા પ્રકારનું ગદ્ય કહેવામાં આવે છે ?

(A) વાદાત્મક

(B) વિવરણાત્મક

(C) વર્ણનાત્મક

(D) ભાવાત્મક

- (79) તમતમારે, જુદાજુદા, દૂરદૂરથી વગેરે કયા પ્રકારના શબ્દો છે ?
- (A) નામયોગી શબ્દો (B) સંયુક્ત શબ્દો  
(C) સામાસિક શબ્દો (D) દ્વિરુક્તિવાળા શબ્દો
- (80) નીચેનામાંથી પરિમાણવાચક વિશેષણ જણાવો.
- (A) આટલું (B) આવું  
(C) કડવું (D) પહેલું
- (81) નીચેનામાંથી કયા વિકલ્પમાં તમામ શબ્દોની જોડણી વ્યાકરણની દૃષ્ટિએ સંપૂર્ણ સાચી છે ?
- (A) શારીરિક, આશીર્વાદ, જિજ્ઞાસુ, સુશ્રુષા  
(B) શારીરિક, આશીર્વાદ, જિજ્ઞાસુ, શુશ્રુષા  
(C) શારીરિક, આશિર્વાદ, જિજ્ઞાસુ, શુશ્રુષા  
(D) શારીરિક, આશિર્વાદ, જિજ્ઞાસુ, શુશ્રુષા
- (82) નીચેનામાંથી કયો શબ્દ 'અશ્વ'નો પર્યાયવાચી શબ્દ નથી ?
- (A) હાય (B) વાજ  
(C) તોખાર (D) કુંજર
- (83) વાક્યશુદ્ધિના નિયમ અનુસાર નીચેનામાંથી વ્યાકરણની દૃષ્ટિએ શુદ્ધ વાક્ય પસંદ કરો.
- (A) મેં આજે એક ગાય અને એક બળદને આવતી જોઈ.  
(B) મેં આજે એક ગાય અને એક બળદ આવતાં જોયાં.  
(C) મેં આજે એક ગાય અને એક બળદ આવતા જોયો.  
(D) મેં આજે એક ગાય અને બળદને આવતી જોઈ.
- (84) નીચેના વાક્યમાં વ્યાકરણીય રીતે કયો શબ્દપ્રયોગ ખોટો છે ? "તેણે મને સહૃદયતાપૂર્વક આવકાર આપ્યો."
- (A) તેણે  
(B) સહૃદયતાપૂર્વક  
(C) આવકાર  
(D) આપ્યો
- (85) લેખનકાર્ય કરતી વખતે વાક્યના અંતે કે વચ્ચે કોઈ વિગત લખવાની બાકી રહી ગઈ હોય, ત્યારે તેને ઉમેરવા કયા ચિહ્નનો ઉપયોગ થાય છે ?
- (A) લોપચિહ્ન ( / ) (B) કાકપદ / હંસપદ ( ^ )  
(C) લઘુરેખા ( - ) (D) ફુદડી ( \* )

(86) Pair the words with their antonyms.

Words

- (a) lazy
- (b) active
- (c) sharp
- (d) fertile

Antonyms

- (i) diligent
- (ii) blunt
- (iii) inert
- (iv) barren

(A) (c) i, (d) ii, (a) iii, (b) iv

(B) (a) ii, (c) iii, (b) i, (d) iv

(C) (c) ii, (d) i, (b) iii, (a) iv

(D) (a) i, (d) iii, (c) ii, (b) iv

(87) Which word has no suffix.

- (A) Health
- (C) Embrace

- (B) Library
- (D) Marriage

(88) Find out the odd pair.

- (A) proud - pride
- (C) grieve - grief

- (B) bond - bind
- (D) lose - loss

(89) Arrange these sentences in proper order to describe an accident-scene.

- (i) Passengers were told to be ready to quit the ship.
- (ii) Everyone knew there was fire on board.
- (iii) Smoke oozed up between the planks.
- (iv) Flames broke out here and there.
- (v) Most people bore the shock bravely.

(A) iii, ii, v, iv, i

(B) i, ii, iv, iii, v

(C) iv, iii, ii, v, i

(D) iii, iv, ii, i, v

(90) Select the sentence with almost similar meaning to the sentence "At the moment the duck looked exhausted."

- (A) The duck looked dreadful
- (C) The duck looked very tired.

- (B) The duck was looking for a place to hide
- (D) The duck seemed unhappy.

(91) Put proper preposition in the blank. He was looking ..... his lost keys.

- (A) at
- (C) after

- (B) for
- (D) into

- (92) ..... he finds a job, his family will starve. Fill in the blank with proper word. (D) However
- (A) It (B) Unless (C) As
- (93) The harder you work, the ..... result you will get. (B) best
- (A) good (C) better (D) lower
- (94) Select the similar word for Inventory. (B) Schedule
- (A) Summary (D) Questionnaire
- (95) All the crows are black. We ..... find a white crow, put proper adverb to complete the sentence.
- (A) frequently (B) usually
- (C) rarely (D) always
- (96) Which expression best conveys the idea ?
- (A) During the curfew, the streets wearing desolate look.
- (B) During the curfew, the streets wore a desolate look.
- (C) During the curfew, the streets have had worn desolate looks
- (D) During the curfew, the streets has been wearing desolation looks
- (97) What is the correct noun form of the verb 'compel' ?
- (A) Compelation (B) Compulsion
- (C) Compulsory (D) Compellment
- (98) Fill in the blank with the correct preposition : "The committee is totally opposed ..... the new proposal."
- (A) for (B) against
- (C) to (D) with
- (99) Fill in the blanks with appropriate articles : "He is ..... heir to the throne and ..... honest man."
- (A) a, a (B) an, a (C) an, an (D) the, a
- (100) Identify the correct verb according to subject-verb Agreement : "Neither the principal nor the teachers ..... present at the meeting yesterday."
- (A) was (B) were (C) are (D) is

- (101) Among the three concepts of production one is marginal product, second is Average product-, then which is the third?
- (A) Fixed Product (B) Variable Product  
(C) Total Product (D) Zero Product
- (102) Scarcity of resources exists:
- (A) At the micro level. (B) At the macro level.  
(C) Micro as well as macro level (D) None of these
- (103) A consumer demands 5 units of a commodity at the price of ₹ 4 per unit. He demands 10 units. When the price falls to ₹ 3 per unit. Price elasticity of demand is equal to:
- (A) 6 (B) 8  
(C) 2 (D) 4
- (104) Which of the following is the example of Direct tax?
- (A) Goods and Service Tax. (B) Wealth Tax  
(C) Sales Tax (D) Value Added Tax (VAT)
- (105) From which year was FEMA introduced in India?
- (A) 1973 (B) 1980  
(C) 1991 (D) 1999
- (106) Which concepts are important to take decision regarding production?
- (A) Fixed cost-variable cost  
(B) Average cost – marginal cost  
(C) Average revenue – marginal revenue  
(D) Utility value of production
- (107) Which slogan is given by Pandit Deendayal for complete employment?
- (A) Money for every individual  
(B) Lack of desires (wantlessness)  
(C) Work for all hand and water for every farm.  
(D) Root for every House.
- (108) Which agency governs the rates of GST?
- (A) Finance Ministry (B) GST Council  
(C) RBI (D) GST Board

- (109) A major disinvestment involves the sale of what percentage of public sector shares?  
 (A) More than 51% (B) 49%  
 (C) 29% (D) 25%
- (110) According to which historian was ancient India the largest economy of the world?  
 (A) Shankaracharya (B) Angus Maddison  
 (C) T. Raychaudhuri (D) Ramanuj Acharya
- (111) From which year CSO (Central Statistical Organization) calculates the national income in India?  
 (A) 1947 (B) 1951  
 (C) 1954 (D) 1961
- (112) What is the other name for gross domestic product?  
 (A) Gross national product (B) Gross home product  
 (C) Gross monetary product (D) Gross real product
- (113) Which diagram is used to represent total infraction and its various divisions?  
 (A) Bar Diagram (B) Pie-Diagram  
 (C) Clustered bar diagram (D) None of the given
- (114) When depression lasts for some time to economics the suppressed demand starts emerging, the what is it called?  
 (A) Recession (B) Boom  
 (C) Recovery (D) Depression
- (115) A market having few producers deciding their policy to sell according to the behavior of competitors is known as?  
 (A) Monopoly (B) Monopolistic competition  
 (C) Oligopoly (D) Perfect competition
- (116) Who gave the third option of economy?  
 (A) Gandhiji (B) Kautilya  
 (C) Pandit Deendayal (D) Chanakya
- (117) Who controls groundnuts when Chu sia type pests attack on it?  
 (A) Rollen (B) Disease causing pest  
 (C) Nitrogen (D) Ladybird beetle

- (118) How are labor and laborer related?  
 (A) Alive (B) Separate  
 (C) Equal (D) Non - Separable
- (119) What does it show when supply curve shifts to right?  
 (A) Expansion of supply (B) Contraction of supply  
 (C) Increase in supply (D) Decrease in supply
- (120) What type of budget did Keynes favor?  
 (A) Balanced Budget (B) Unbalanced Budget  
 (C) Balanced and Unbalanced both (D) Revenue Budget
- (121) Consider the following statements:  
 1. A downward sloping curve shows an inverse relationship.  
 2. A straight-line graph always indicates constant rate of change.  
 (A) 1 only (B) 2 only  
 (C) Both 1 and 2 (D) Neither of the above
- (122) Which indicator best measures economic inequality in a country?  
 (A) HDI (B) Gini Coefficient  
 (C) GDP (D) Inflation
- (123) If two countries have the same GDP but different populations, which indicator should be used to compare living standards?  
 (A) GDP Growth rate (B) HPI  
 (C) TAI (D) Per capita income
- (124) Which of the following situations best indicates inflation?  
 (A) Rise in price of a single commodity  
 (B) Decline in Production  
 (C) Continuous increase in general price level  
 (D) Rise in export demand
- (125) Which type of inflation occurs slowly over a long period?  
 (A) Galloping Inflation (B) Hyper Inflation  
 (C) Runaway Inflation (D) Creeping Inflation

(126) Which policy is used by government to control inflation?

- (A) Fiscal Deficit Policy
- (B) Expansionary Monetary Policy
- (C) Contractionary Monetary Policy
- (D) Trade Expansion Policy

(127) Assertion (A) : Economic growth automatically ensures economic development.

Reason (R) : Development includes improvements in education and health.

Which among the following is correct?

- (A) Both (A) and (R) are correct and (R) is the correct explanation of (A)
- (B) Both (A) and (R) are correct but (R) does not explain (A)
- (C) (A) is correct but (R) is incorrect
- (D) (A) is incorrect but (R) is correct

(128) Assertion (A) : Employment generation programs completely eliminates poverty.

Reason (R) : They increase income opportunities for poor people.

Which among the following is correct?

- (A) Both (A) and (R) are correct and (R) explains (A)
- (B) Both (A) and (R) are correct and (R) does not explain (A)
- (C) (A) is correct but (R) is incorrect.
- (D) (A) is incorrect but (R) is correct

(129) Assertion (A) : Disguised unemployment is common in Indian agriculture.

Reason (R) : Agriculture is the largest occupation in India.

Find the correct option?

- (A) Both (A) and (R) are correct and (R) explain (A)
- (B) Both (A) and (R) are correct and (R) does not explain (A)
- (C) (A) is correct but (R) is incorrect
- (D) (A) is incorrect but (R) is correct.

(130) Which sector has the greatest potential to absorb surplus labor from agriculture?

- (A) Primary Sector
- (B) Secondary Sector
- (C) Tertiary Sector
- (D) Both (B) and (C)

- (131) Which type of unemployment is most likely to exist even when the economy is growing rapidly?
- (A) Cyclical unemployment
  - (B) Seasonal unemployment
  - (C) Disguised unemployment
  - (D) Frictional unemployment
- (132) Assertion (A) : Pie-diagram are suitable for showing trends over time.  
Reason (R) : Pie-diagrams show proportional distribution of components.  
Find the correct option.
- (A) Both (A) and (R) are correct and (R) explains (A)
  - (B) Both (A) and (R) are correct but (R) does not explain (A)
  - (C) (A) is correct but (R) is incorrect
  - (D) (A) is incorrect but (R) is correct
- (133) If total revenue = ₹ 800 and Total cost = ₹ 650, What will be the firm's total profit?
- (A) ₹ 100
  - (B) ₹ 200
  - (C) ₹ 150
  - (D) ₹ 250
- (134) A researcher wants to present the relative proportion of different sectors in GDP for a particular year. Which graphical method would be most appropriate?
- (A) Time-Series Graph
  - (B) Pie-diagram
  - (C) Multiple bar diagram
  - (D) Line diagram
- (135) Which organization prepares and publishes the Human Development Report?
- (A) World Bank
  - (B) IMF
  - (C) UNDP
  - (D) WTO
- (136) Which monetary tool directly influences the lending capacity of commercial banks?
- (A) Repo rate
  - (B) Cash reserve ratio
  - (C) Bank rate
  - (D) Open market operations
- (137) Which situation would most likely occur if the central bank reduces the repo rate?
- (A) Reduction in bank lending
  - (B) Increase in CRP
  - (C) Increase in borrowing by commercial banks.
  - (D) Decrease in Government expenditure.

- (138) A commercial bank receives a deposit of ₹ 10,000. If the cash reserve ratio is 20%, what is the maximum loan amount the bank can initially create?
- (A) ₹ 2,000 (B) ₹ 5,000  
(C) ₹ 10,000 (D) ₹ 8000
- (139) If people suddenly withdraw a large portion of their bank deposits, which effect will occur first?
- (A) Increase in credit creation  
(B) Decrease in lending capacity of banks.  
(C) Increase in bank reserves  
(D) Increase in money multiplier
- (140) If the central bank increases repo rate and increases CRR simultaneously, what will most likely happen?
- (A) Credit expansion (B) Increase in bank profits  
(C) Sharp contraction of credit (D) Increase in exports
- (141) Which economist believes that the true inflation is caused when there is rise in price even when there is full employment?
- (A) Marshall (B) Crowther  
(C) Keynes (D) Pigou
- (142) What can be measured by the Gini co-efficient?
- (A) Relative poverty (B) Absolute poverty  
(C) Poverty line (D) Inflation rate
- (143) In present times who manages the prime minister's Jan Dhan Yojana?
- (A) SBI (B) Post office  
(C) Central Government (D) RBI
- (144) Bhagwati Committee was formed to study which problem?
- (A) Unemployment (B) Poverty  
(C) Population (D) Inflation
- (145) By 2050, how much of the world population will be in cities?
- (A) 1/2 (B) 1/4  
(C) 2/3 (D) 3/4

- (146) What was the population growth rate in 2011?  
 (A) 1.51% (B) 1.64%  
 (C) 2.5% (D) 2.6%
- (147) Why does demand change during the development process?  
 (A) Increasing production (B) Increasing Advertisement  
 (C) Increasing Debt (D) Increasing income
- (148) Industrialization, urbanization, division of labor and specialization made the barter system \_\_\_\_  
 (A) Limited (B) Less applicable  
 (C) Limited and less applicable (D) Beneficial
- (149) In which type of economy is a free market found?  
 (A) Capitalist (B) Socialist  
 (C) Mixed – economy (D) Market – socialist
- (150) Disguised unemployment is a common phenomenon in which sector in a developing economy?  
 (A) Industrial sector (B) Agricultural sector  
 (C) Service sector (D) Only in developed economy
- (151) Inspired by the ideas of which upanishad, Gandhiji introduced the Principle of Trusteeship.  
 (A) Kathapanishad (B) Ishopanishad  
 (C) Prashnapanishad (D) Chandogyapanishad
- (152) The idea which revolves around the human value of not holding excess goods / wealth / resources etc. then what is necessary to said by one's wants is known as:  
 (A) Non-Possession (B) Antyodaya  
 (C) Consumption (D) Sarvodaya
- (153) According to the estimate of Tendulkar committee, what was the percentage of absolute poverty in India in the year 2011-12?  
 (A) 20.2% (B) 13.7%  
 (C) 31.2% (D) 21.9%
- (154) In which Government scheme the bank account is opened with zero balance?  
 (A) MNREGA (B) Rajiv Gandhi Yojana  
 (C) Jan Dhan Yojana (D) Prime Minister Rojgar Yojana

- (155) Government has declared which day as Employment Day?  
(A) 15th February (B) 1st April  
(C) 26th January (D) 2nd February
- (156) When was NABARD constructed?  
(A) 1976 (B) 1980  
(C) 1982 (D) 1990
- (157) Which of the following factors does not affect the balance of payments?  
(A) Education system (B) Prices of tradable goods  
(C) Inevitable imports (D) Exchange rate
- (158) KRIBHCO is an example of what type of industry?  
(A) Departmental Industries (B) Joint Stock companies  
(C) Consumers Goods Industries (D) Co-operative sector industries
- (159) Which of the following is not a public sector unit?  
(A) MTNL (B) BEL  
(C) Infosys (D) Indian Railways
- (160) What was literacy rate of Gujarat in 2011?  
(A) 74.04% (B) 79.31%  
(C) 80.02% (D) 56.0%
- (161) Which of the following does not directly reduce poverty?  
(A) Employment Generation  
(B) Skill Development  
(C) Increase in speculative financial investments.  
(D) Expansion of rural infrastructure.
- (162) Which situation indicates population explosion?  
(A) Declining birth rate and death rate.  
(B) Declining fertility rate  
(C) High birth rate with falling death rate.  
(D) High literacy rate.

- 163) Which factor most strongly contributes to low agricultural productivity in India?  
(A) Excess mechanization  
(B) Small and fragmented landholdings.  
(C) High rainfall  
(D) High capital investment
- 164) Which of the following is considered social infrastructure?  
(A) Power supply  
(B) Transport  
(C) Education  
(D) Irrigation
- 165) Which issue arises due to rapid population growth and urban migration?  
(A) Decrease in housing demand.  
(B) Increase in slums and informal settlements.  
(C) Decline in infrastructure needs.  
(D) Reduction in pollution.
- 166) Which of the following is a major challenge related to urbanization in India?  
(A) Excess housing availability  
(B) Infrastructure shortages  
(C) Decrease in transportation demand  
(D) Reduction in pollution.
- 167) Pandit Deendayal Upadhyay suggested a "third alternative" to capitalism and socialism because  
(A) Both systems ignored technological progress.  
(B) Both systems created issues like inequality, exploitation and instability.  
(C) Both systems rejected private property completely.  
(D) Both systems promoted decentralized village economies.
- 168) Which of the following features best distinguishes the Indian economic system after independence?  
(A) Complete privatization of industries  
(B) Dominance of foreign corporations  
(C) Coexistence of public and private sectors.  
(D) Complete absence of state planning.
- 169) Assertion (A): Budget is an annual financial statement of the government.  
Reason (R) : It shows estimated receipts and expenditures quarterly.  
Find the correct option.  
(A) Both (A) and (R) are correct and (R) explains (A)  
(B) Both (A) and (R) are correct but (R) does not explain (A)  
(C) (A) is correct but (R) is incorrect  
(D) (A) is incorrect but (R) is correct

- (170) Which of the following statements correctly reflects a structural problem of the Indian economy.
- (A) Excess industrial employment
  - (B) Overdependence on agriculture
  - (C) High technological development in rural areas
  - (D) Low population pressure
- (171) Which of the following policies is most directly associated with globalization?
- (A) Encouraging foreign investment
  - (B) Increasing import restrictions.
  - (C) Expanding public sector enterprises
  - (D) Restricting international trade
- (172) Consider the following statements:
- (1) A deficit budget occurs when expenditure exceeds revenue.
  - (2) A surplus budget occurs when revenue exceeds expenditure.
  - (3) A balanced budget occurs when revenue = expenditure.
- Which of the above statements is/are correct?
- (A) 1 and 2
  - (B) 2 and 3
  - (C) 1, 2 and 3
  - (D) 1 and 3
- (173) Which of the following fiscal situations is generally adopted during economic depression?
- (A) Surplus Budget
  - (B) Balanced Budget
  - (C) Deficit Budget
  - (D) Zero Budget
- (174) Consider the following statements:
- (1) Economics studies human behaviour in relation to scarcity.
  - (2) Economics deals only with material welfare.
  - (3) Economics involves choice among alternative use of resources.
- Which of the above statements is/are correct?
- (A) 1 and 3
  - (B) 2 and 3
  - (C) 1 and 2
  - (D) 1, 2 and 3
- (175) Which of the following factors does not affect demand?
- (A) Consumer income
  - (B) Price of related goods
  - (C) Technology used in production.
  - (D) Consumer preferences.

(176) Which of the following would not cause a shift in the demand curve?

- (A) Change in consumer income
- (B) Change in price of the good itself.
- (C) Change in taste and preferences.
- (D) Change in price of related goods.

(177) Which cost does not change with output in the short run?

- (A) Variable cost
- (B) Fixed cost
- (C) Marginal cost
- (D) Average variable cost

(178) Assertion (A) : in perfect competition, firms are price takers.

Reason (R) : Individual firms cannot influence market price.

Find correct option.

- (A) Both (A) and (R) are true and (R) explain (A)
- (B) Both (A) and (R) are true but (R) does not explain (A)
- (C) (A) is true but (R) is false
- (D) (A) is false but (R) is true.

(179) Why are transfer payments excluded from national income?

- (A) They are illegal.
- (B) They are paid by the Government.
- (C) They are too small to measure
- (D) They do not represent production of goods or services.

(180) A fall in price of a commodity leads to increase in quantity demanded because:

- (A) Utility increases
- (B) Supply increase
- (C) Real income of consumers increase
- (D) Cost of production decreases.

(181) Action Research has one drawback.

- (A) Fact and evidence are stressed.
- (B) Unverifiable and deceptive conclusions.
- (C) Action research has a great stimulating effect upon the teacher
- (D) Introduce experimental outlook

- (182) Economics is regarded as a positive science because
- (A) It studies human welfare.
  - (B) It prescribes a code of conduct for economists.
  - (C) It prescribes some values as desirable and others as undesirable.
  - (D) It is neutral between ends and means.
- (183) Which of the following methods is useful for the systematic scientific study of Economics?
- (A) Inductive
  - (B) Deductive
  - (C) Both inductive and deductive
  - (D) None of the above
- (184) Which of the following is an example of the correlation between economics and mathematics?
- (A) Gandhiji's Principle of Trusteeship
  - (B) Types of needs
  - (C) Malthus' theory of population
  - (D) Types of goods
- (185) Which of the following is not a characteristic of a good teacher?
- (A) Accepting and applying pupils suggestion
  - (B) Being lively and friendly
  - (C) Being sensitive to pupils needs
  - (D) Being stern and firm.
- (186) Which of the following is not a step of teaching of Economics?
- (A) Presentation
  - (B) Hypothesis
  - (C) Generalization
  - (D) Recapitulation
- (187) What is a one-way (Unilateral) correlation?
- (A) Connecting one subject with another subject.
  - (B) Connecting between two units.
  - (C) Connecting between two sub-topics.
  - (D) Connecting with more than two subjects.
- (188) Augmented learning means \_\_\_\_\_.
- (A) Self learning
  - (B) Uses of technology to create an interaction learning environment
  - (C) Remote learning
  - (D) Application of Lecture Method with proper audible pitch

- 9) Which is the third stage of the five stages of micro teaching.
- (A) Feedback session
  - (B) Refeedback session
  - (C) Reteach session
  - (D) Replan session
- 0) Which of the following is not a disadvantage of essay type examination?
- (A) Subjectivity
  - (B) Lack of Validity
  - (C) Variability in scoring
  - (D) Students answer freely
- 1) While teaching market structures, the teacher divides the class into groups and assigns each group a different market type to analyze.  
What does this method promote?
- (A) Passive learning
  - (B) Cooperative learning
  - (C) Memorization learning
  - (D) Individual learning
- 2) Which component of lesson plan ensures students actively participate in learning?
- (A) Homework stage
  - (B) Introduction stage
  - (C) Summary stage
  - (D) Activity stage
- 3) In Herbartian lesson planning, what does the "Presentation stage" refer to?
- (A) Introduction of new content
  - (B) Revision of previous knowledge
  - (C) Testing students
  - (D) Giving assignments.
- 4) Which teaching method is most effective for developing economic decision-making skills?
- (A) Lecture method
  - (B) Problem solving method
  - (C) Dictation method
  - (D) Drill method
- 5) While teaching scarcity, the teacher presents a real-life case where a village must decide whether to use land for farming or housing. Students debate the decision. This strategy mainly develops student's?
- (A) Memorization of economic definitions.
  - (B) Skill in copying textbook content.
  - (C) Ability to apply economic reasoning
  - (D) Ability to recall statistical data.

- (196) Which method is most appropriate when the objective is to help students discover economic principles by themselves?
- (A) Lecture method (B) Dictation method  
(C) Demonstration method (D) Heuristic method
- (197) A teacher asks students to analyze local market price fluctuations and explain them using demand and supply concepts.  
What does this activity promote?
- (A) Rote learning (B) Experiential learning  
(C) Mechanical learning (D) Drill practice
- (198) Which of the following best reflects constructive teaching?
- (A) Teacher explains all concepts directly  
(B) Students memorize textbook definitions.  
(C) Students actively construct knowledge through activities.  
(D) Teacher gives readymade notes.
- (199) Which classroom activity best develops economic reasoning among students?
- (A) Copying notes from board  
(B) Solving real-life economic problem  
(C) Memorization  
(D) Repeating diagrams
- (200) Which characteristic best defines formative assessment?
- (A) Conducted only at the end of the course.  
(B) Used mainly for grading students.  
(C) Replaces final examination.  
(D) Provides continuous feedback during learning.

